


Getting Ready for Third Grade



Math Summer Packet

8 Weeks to 3rd Grade Success!



In this packet you will find 8 weeks of review work for summer. Each week your child will complete one half of each page. This will help your child retain what they learned in second grade to help him/her succeed in third grade.



Getting Ready for Third Grade Summer Review

Week 1


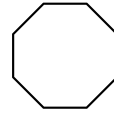
Addition/Subtraction

1. $3 + 2 = \underline{\quad}$
2. $2 + 7 = \underline{\quad}$
3. $5 + 8 = \underline{\quad}$
4. $7 + 7 = \underline{\quad}$
5. $6 + 4 = \underline{\quad}$
6. $9 + 2 = \underline{\quad}$
7. $9 - 2 = \underline{\quad}$
8. $10 - 6 = \underline{\quad}$
9. $7 - 4 = \underline{\quad}$
10. $12 - 3 = \underline{\quad}$
11. $8 - 5 = \underline{\quad}$
12. $15 - 5 = \underline{\quad}$

Geometry

Write the name of the shape.

Triangle	Octagon
square	rectangle
pentagon	rhombus





Getting Ready for Third Grade Summer Review

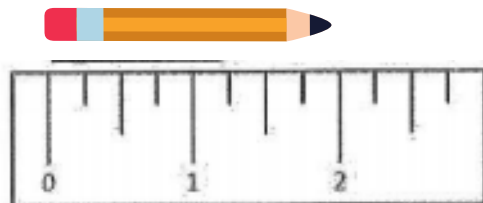
Week 2

Addition/Subtraction

1. $11 + 22 = \underline{\quad}$
2. $15 + 8 = \underline{\quad}$
3. $16 + 9 = \underline{\quad}$
4. $20 + 32 = \underline{\quad}$
5. $18 + 2 = \underline{\quad}$
6. $36 + 9 = \underline{\quad}$



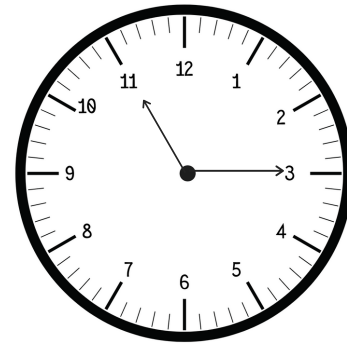
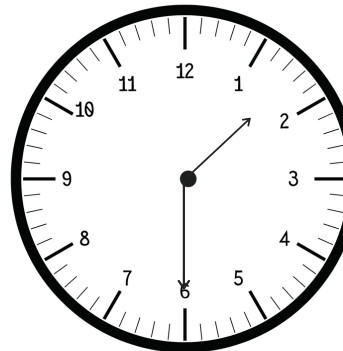
Measurement

How many inches is the pencil?



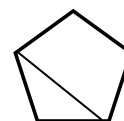
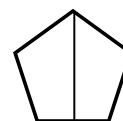
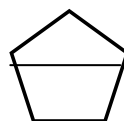
Time

What time is shown on the clock?



Geometry

Circle the shape divided into equal parts.



Getting Ready for Third Grade Summer Review

Week 3

Compare Numbers

Write <, >, = to compare the numbers.

1. 379 ○ 381

2. 471 ○ 406

3. 870 ○ 243

4. 725 ○ 527

Money

Write the total value of the coins.







Getting Ready for Third Grade Summer Review

Week 4

Place Value

Write the value of the underlined number.

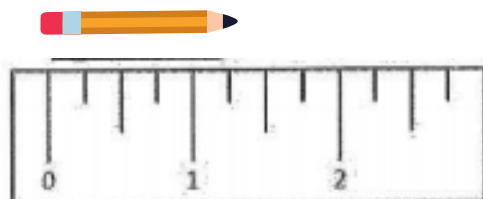
1. 586 = _____ 1. 643 = _____

2. 971 = _____ 2. 203 = _____

3. 450 = _____ 3. 811 = _____

Measurement

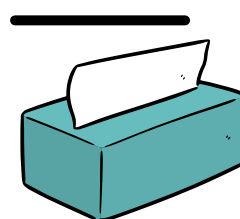
How many inches is the pencil?



Geometry

Write the name of the shape.

cone cube
rectangular prism sphere
cylinder



Subtraction

$$\begin{array}{r} 1. \ 32 \\ - \ 11 \\ \hline \end{array}$$

$$\begin{array}{r} 2. \ 27 \\ - \ 13 \\ \hline \end{array}$$

$$\begin{array}{r} 3. \ 15 \\ - \ 5 \\ \hline \end{array}$$

$$\begin{array}{r} 4. \ 14 \\ - \ 13 \\ \hline \end{array}$$

$$\begin{array}{r} 5. \ 35 \\ - \ 24 \\ \hline \end{array}$$

$$\begin{array}{r} 6. \ 22 \\ - \ 7 \\ \hline \end{array}$$

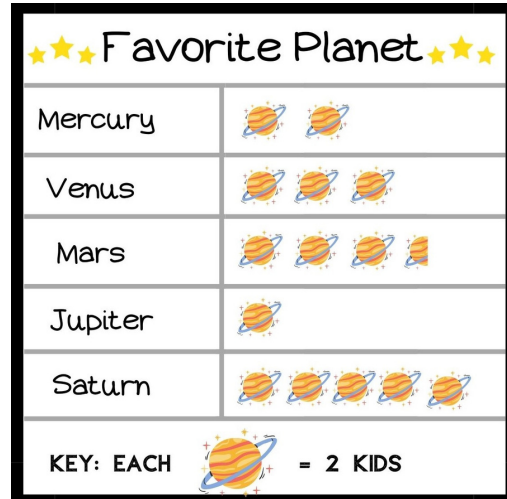
Unknown Number

What number makes the sentence true?

$$3 + \underline{\quad} = 4 + \underline{\quad}$$

Graphs

Look at the graph. Which plant has the most votes?



Place Value

Write the value of the underlined number.

$$1. \ 2\underline{6}3 = \underline{\quad}$$

$$1. \ \underline{6}01 = \underline{\quad}$$

$$2. \ \underline{5}40 = \underline{\quad}$$

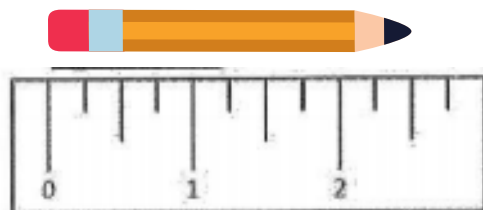
$$2. \ \underline{6}89 = \underline{\quad}$$

$$3. \ 30\underline{0} = \underline{\quad}$$

$$3. \ 4\underline{5}3 = \underline{\quad}$$

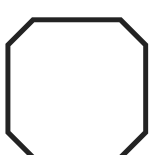


Measurement

How many inches is the pencil?


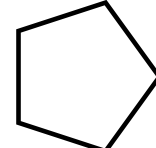
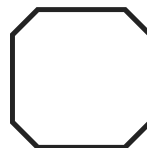


Geometry

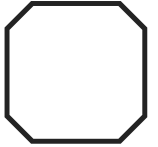
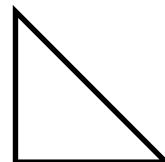
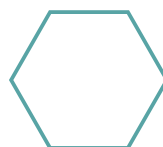
Circle the shapes with four sides.



Circle the shape with less than four sides.



Circle the shapes with more than four sides.



Getting Ready for Third Grade Summer Review

Week 7

Addition/Subtraction

1. $5 + 2 = \underline{\quad}$
2. $8 + 7 = \underline{\quad}$
3. $3 + 8 = \underline{\quad}$
4. $7 + 6 = \underline{\quad}$
5. $6 + 6 = \underline{\quad}$
6. $4 + 2 = \underline{\quad}$
7. $9 - 5 = \underline{\quad}$
8. $12 - 6 = \underline{\quad}$
9. $9 - 6 = \underline{\quad}$
10. $18 - 4 = \underline{\quad}$
11. $8 - 8 = \underline{\quad}$
12. $13 - 5 = \underline{\quad}$

Geometry

Draw lines on the shape to show **thirds**.



Draw lines on the shape to show **halves**.



Draw lines on the shape to show **fourths**.



Getting Ready for Third Grade Summer Review

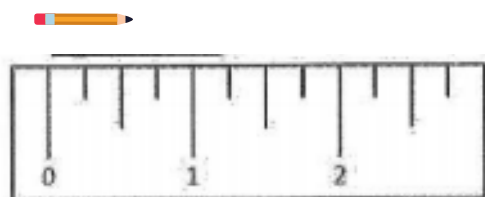
Week 8

Addition/Subtraction

1. 44
 $+ 27$
2. 35
 $+ 18$
3. 46
 $+ 9$
4. 60
 $+ 35$
5. 28
 $+ 3$
6. 14
 $+ 9$




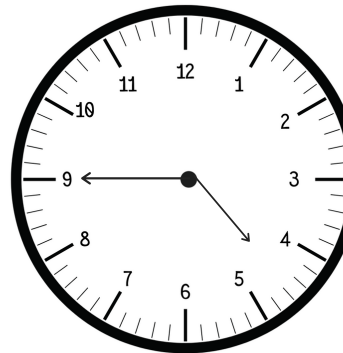
Measurement

How many inches is the pencil?



Time

What time is shown on the clock?



Geometry

Circle the shapes divided into equal parts.

